



Name _____

Date _____


1. Fill in the blanks to make true statements.



a. 4 groups of five = _____

4 fives = _____

$4 \times 5 =$ _____



b. 5 groups of four = _____



5 fours = _____

$5 \times 4 =$ _____

c. $6 + 6 + 6 =$ _____

_____ groups of six = _____

$3 \times$ _____ = _____



d. $3 +$ _____ $+$ _____ $+$ _____ $+$ _____ $+$ _____ $+$ _____ $=$ _____

6 groups of _____ = _____

$6 \times$ _____ = _____



2. The picture below shows 3 groups of hot dogs. Does the picture show 3×3 ? Explain why or why not.



3. Draw a picture to show $4 \times 2 = 8$.

4. Circle the pencils below to show 3 groups of 6. Write a repeated addition and a multiplication sentence to represent the picture.

